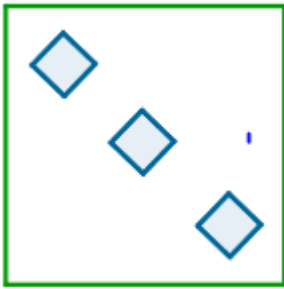
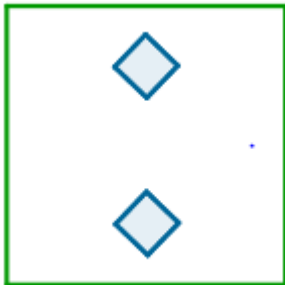


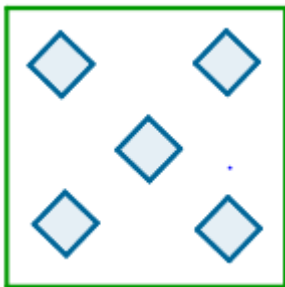
1. Dorysuj brakujące kwadraty:



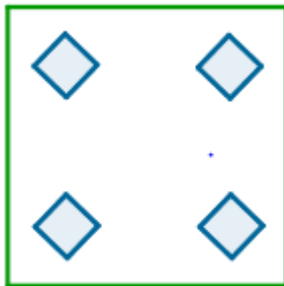
Dorysuj 3 kwadraty. $3 + 3 = \dots\dots\dots$



Dorysuj 2 kwadraty. $2 + 2 = \dots\dots\dots$

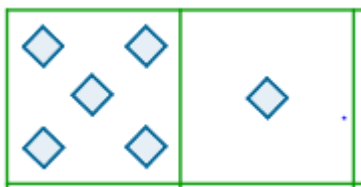


Dorysuj 3 kwadraty. $3 + 5 = \dots\dots\dots$


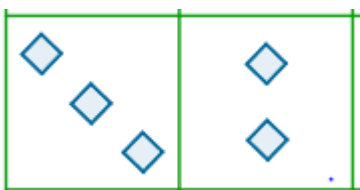



Dorysuj 4 kwadraty. $4 + 4 = \dots\dots\dots$

2. Policz kwadraty i gwiazdki. Wykonaj dodawanie.

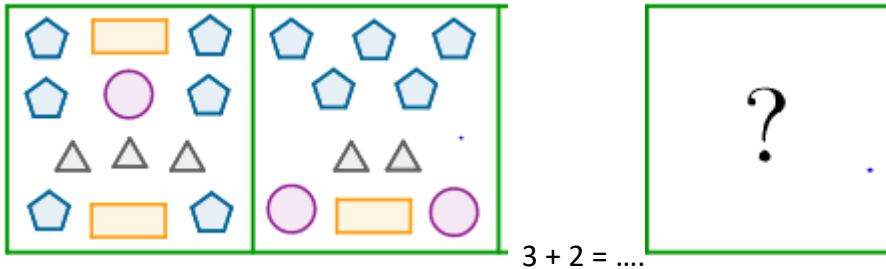


$5 + 1 = \dots\dots\dots$

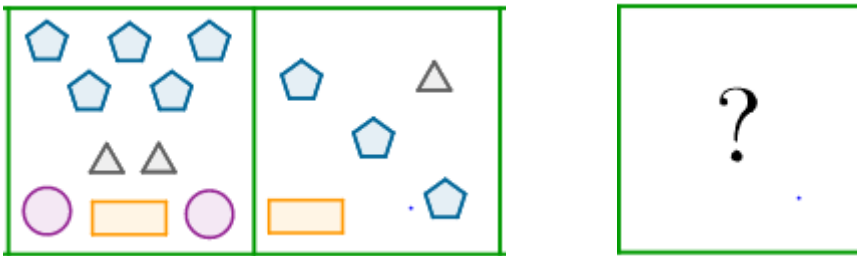





3. Ile trójkątów jest na dwóch obrazkach? Narysuj wszystkie trójkąty w tym kwadracie.



Ile prostokątów jest na tych obrazkach? Narysuj te prostokąty w tym kwadracie.



4. Odgadnij wyrazy:



Powodzenia.

